

Name _____

Place Value of Whole Numbers

COMMON CORE STANDARD CC.5.NBT.1

Understand the place value system.

Write the value of the underlined digit.

1. 5,165,874

60,000

2. 281,480,100

3. 7,270

4. 89,170,326

5. 7,050,423

6. 646,950

7. 37,123,745

8. 315,421,732

Write the number in two other forms.

9. 15,409

10. 100,203

11. 6,007,200

12. 32,005,008

Problem Solving






13. The U.S. Census Bureau has a population clock on the Internet. On a recent day, the United States population was listed as 310,763,136. Write this number in word form.

14. In 2008, the population of 10- to 14-year-olds in the United States was 20,484,163. Write this number in expanded form.

Lesson Check (CC.5.NBT.1)

- A movie cost \$3,254,107 to produce. Which digit is in the hundred thousands place?
 - (A) 5
 - (B) 4
 - (C) 2
 - (D) 1
- Which is another way to write two hundred ten million, sixty-four thousand, fifty?
 - (A) 210,640,050
 - (B) 210,064,050
 - (C) 201,064,500
 - (D) 200,106,450

Spiral Review (Reviews CC.4.OA.5, CC.4.NBT.6, CC.4.G.2, CC.4.G.3)

- If the pattern below continues, what number likely comes next? (Grade 4)
9, 12, 15, 18, 21, ?
 - (A) 36
 - (B) 24
 - (C) 22
 - (D) 20
- What is $52 \div 8$? (Grade 4)
 - (A) 8 r4
 - (B) 7 r4
 - (C) 6 r4
 - (D) 5 r4
- How many pairs of parallel sides does the trapezoid below have? (Grade 4)
 - (A) 0
 - (B) 1
 - (C) 2
 - (D) 4
- Which figure appears to have only 1 line of symmetry? (Grade 4)
 - (A) 
 - (B) 
 - (C) 
 - (D) 